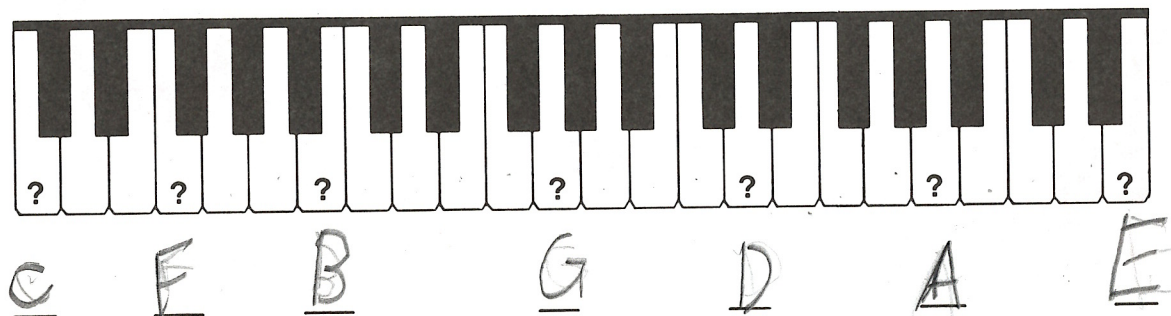



# Review

1. Name these keys.



2. Write the names of the notes in the C position. C D E F G


3. Draw four quarter notes. 

4. Draw four half notes. 

5. Draw four dotted half notes. 

6. Draw four whole notes. 

7. Clap and count this rhythm. 

8. Name the following notes.   
whole note quarter note dotted half note half note

9. In a time signature the top number tells how many beats are in a measure;  
 the bottom number tells what kind of note gets one beat.