



Name each note.

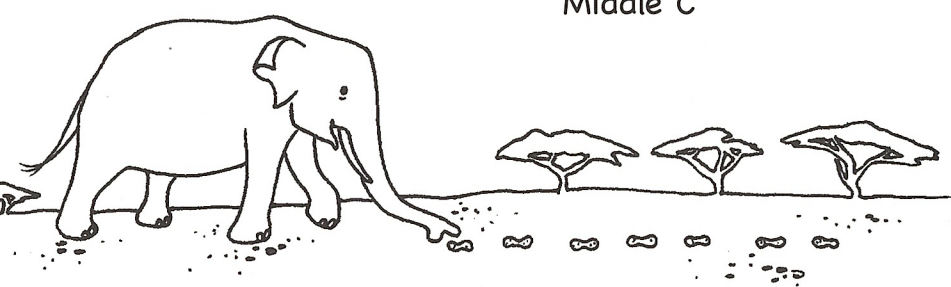
Write the numbered notes on the staff  
in the correct place on the keyboard.



1. B 2. G 3. F 4. D 5. A 6. C



Middle C




### NEW NOTES!

Bastien Music Flashcards GP27: Practice naming and playing the  $\text{basso}$  line notes until you can recognize them easily.

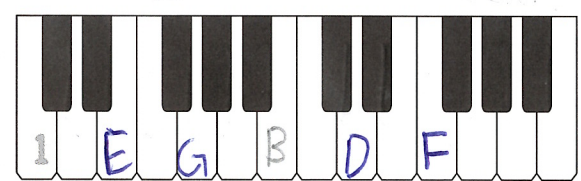


A. Name each note.

B. Write the numbered notes on the staff  
in the correct place on the keyboard.



1. C 2. B 3. F 4. G 5. D 6. E




Middle C




### NEW NOTES!


Bastien Music Flashcards GP27: Practice naming and playing the  $\text{treble}$  line notes until you can recognize them easily.



Draw each **line note** on the staff.  
Write the numbered notes on the staff  
in the correct place on the keyboards.





1. G    2. Middle C    3. F    4. A    5. B    6. D




Middle C

I did not  
learn this note  
in the note  
speller.



7. G    8. D    9. Middle C    10. E    11. B    12. F



Middle C

C. Fill in the blanks with note names from these pages  
to form a fun fact.

A lion's ro a r c a n

B e h e a r d

f or f iv e mil e s.

