

Write the letter names of the space notes three times:


1.

2. 3.

Unscramble the letters to solve the riddle.


Q: What is black and white and "red" all over?

A N e w s p a p e r  
 W N E P R S P A E



Name each note.


Write the numbered notes on the staff in the correct place on the keyboard.



1. A 2. G 3. F 4. C 5. B 6. E



Middle C




### NEW NOTES!

Bastien Music Flashcards GP27: Practice naming and playing the  $\text{basso}$  line notes until you can recognize them easily.




A. Name each note.

B. Write the numbered notes on the staff in the correct place on the keyboard.



1. F 2. D 3. A 4. E 5. C 6. G




Middle C



### NEW NOTES!


Bastien Music Flashcards GP27: Practice naming and playing the  $\text{treble}$  line notes until you can recognize them easily.





Draw each **space note** on the staff.

Write the numbered notes on the staff in the correct place on the keyboard.



Middle C

Fill in the blanks with note names from above to form a fun fact.

Are zebras' stripes black over white or white over black?

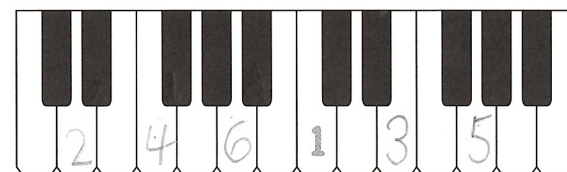

E a c h z e b r a h a s its own

qu e p a tt e rn o f

it e strip e s on b l a ck.

A. Draw each **space note** on the staff.

B. Write the numbered notes on the staff in the correct place on the keyboard.



Middle C

